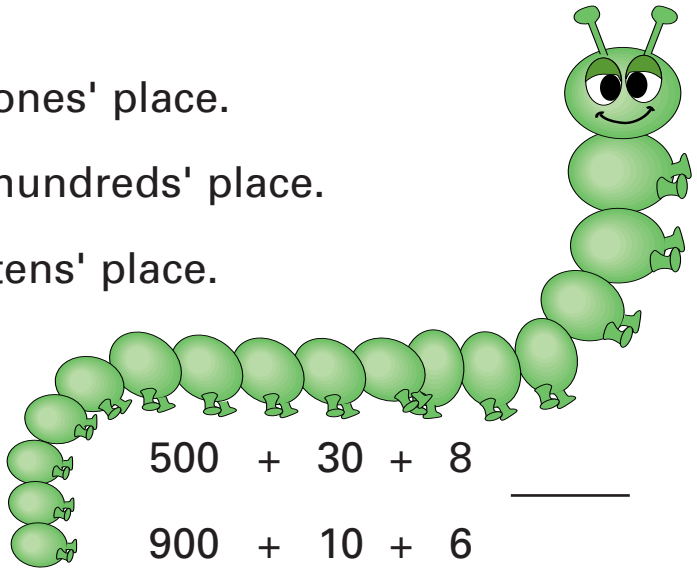


1. Write the numbers.

452 has a _____ in the ones' place.

918 has a _____ in the hundreds' place.

763 has a _____ in the tens' place.



2. Write the numbers.




495 = _____ + _____ + _____

500 + 30 + 8 _____

817 = _____ + _____ + _____

900 + 10 + 6 _____

3. Write the correct time.



_____ : _____ _____ : _____ _____ : _____ _____ : _____

4. Write the value of each coin.



_____ ¢



_____ ¢



_____ ¢



_____ ¢



_____ ¢



_____ ¢



_____ ¢



_____ ¢

