

6. Find the quotient.

$$4 \overline{)11}$$

$$5 \overline{)38}$$






$$3 \overline{)25}$$

$$7 \overline{)23}$$

$$8 \overline{)46}$$

$$9 \overline{)33}$$

7. Write the correct time.



\_\_\_\_\_

\_\_\_\_\_

\_\_\_\_\_

\_\_\_\_\_

\_\_\_\_\_

8. Write = or  $\neq$ .

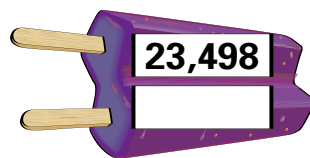

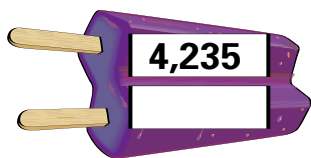

$$\frac{4}{6} \square \frac{10}{15}$$

$$\frac{2}{10} \square \frac{5}{25}$$

$$\frac{3}{4} \square \frac{9}{16}$$

$$\frac{10}{16} \square \frac{5}{7}$$

9. Round the numbers to the nearest 10.



10. Round the numbers to the nearest 100.

