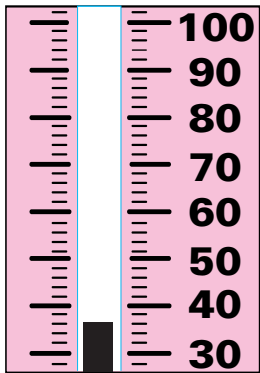
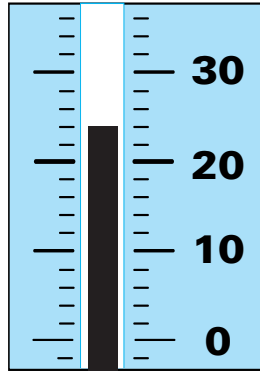


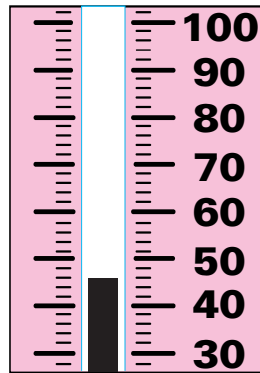
1. Write the temperature.



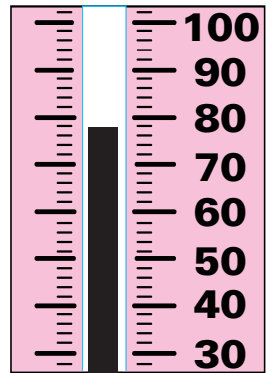
\_\_\_\_\_ °



\_\_\_\_\_ °




\_\_\_\_\_ °




\_\_\_\_\_ °

2. Write the ratio.




birds to fish \_\_\_\_\_ : \_\_\_\_\_      butterflies to lambs \_\_\_\_\_ : \_\_\_\_\_  
 butterflies and birds to fish and lambs \_\_\_\_\_ : \_\_\_\_\_


3. Write the correct time.




\_\_\_\_\_ : \_\_\_\_\_



\_\_\_\_\_ : \_\_\_\_\_



\_\_\_\_\_ : \_\_\_\_\_



\_\_\_\_\_ : \_\_\_\_\_

4. Write ones', tens', hundreds', or thousands'.

2,483 has a 8 in the \_\_\_\_\_ place.  
 2,483 has a 2 in the \_\_\_\_\_ place.  
 9,048 has a 8 in the \_\_\_\_\_ place.  
 9,048 has a 0 in the \_\_\_\_\_ place.

